

# Kendriya Vidyalaya RRC Fatehgarh Winter Vacations Homework

Class I

हिंदी

1. 10 पेज सुलेख लिखो ।
2. 1-40 तक गिनती शब्दों में लिखो ।
3. बारहखड़ी लिखो और नियमित अभ्यास करो ।
4. 10 विलोम शब्द लिखो और याद करो ।
5. 10 एकवचन शब्दों से बहुवचन शब्द बनाये ।
6. मात्राओं के ज्ञान के आधार पर एक चार्ट पेपर तैयार करें ।
7. 'अ से ज' तक अंग्रेजी में वर्णमाला 10 बार लिखें और अभ्यास करें ।

## ENGLISH

- Write 10 pages of cursive handwriting.
- Write the months and days name.
- Draw a tree showing leaves, fruits, branches, birds, nest, and swing on a chart paper.
- Write and learn 10 opposite words.
- Write 20 parts of body name.
- Make a greeting card of Happy New Year

## MATHS

- Write and learn tables from 1 to 15 in your copy.
- Make a chart of different currency (ex- 5, 10, 20, 50,100,500 etc.)
- Draw or paste longer, shorter, thinner, thicker pictures in your copy.
- *Measure* five things of your house using your handspan and footspan and write it in your copy.
- Make a model of clock using thermocol sheet or cardboard sheet.
- Write the names of your family members and write the name of the letter that occurs most or less.

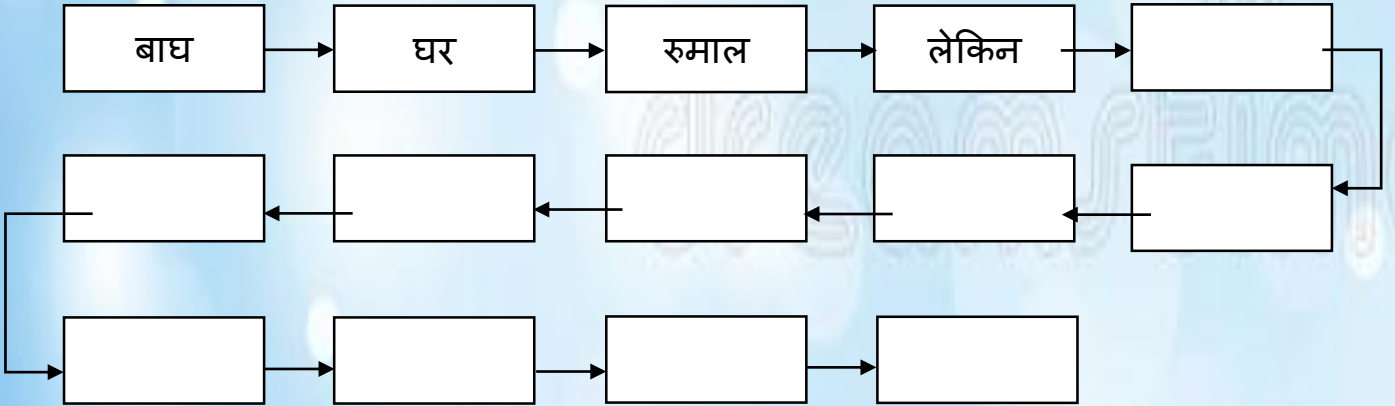
## EVS

- Make a model of a nest with the help of dry grass, leaves, threads, cotton etc.
- Draw a big milk bottle and write five names of things made out of milk.
- Collect the wrappers or empty cartoons or labels of things that are plant product (ex. Margo soap) and paste them in copy.
- Observe your kitchen, bedroom and bathroom and write five important things that are always kept there.
- Visit a construction site of a house and collect four things that are important for house making and paste them in your copy.
- Make a model of letter box.

## Class II

### हिंदी

1. प्रतिदिन एक पेज सुलेख लिखो ।
2. एक समाचार रोज़ लिखो ।
3. शब्दों की रेलगाड़ी के 10 डिब्बे पूरा करो ।



4. घर व आस पड़ोस में आने वाले अखबार के नाम पता करो और लिखो ।
5. 'बस के नीचे बाघ' पाठ और 'बाघ का बच्चा' कविता याद करो ।
6. पांच वाक्य अपने शीतकालीन अवकाश पर लिखो ।

## ENGLISH

**Q.2 Do 1 Page Writing Daily.**

**Q.3 Write and learn 10-10 difficult words with their meanings from Unit-7 and Unit-8.**

**Q.4 Make a chart on Singular and Plural.**

**Q.5 Learn gender of nouns from your notebook. (Ex. Man-Woman)**

Q.6 Try to play one musical instrument.

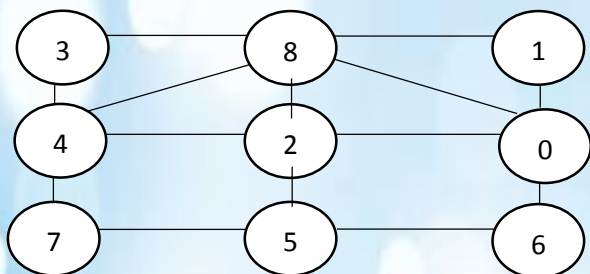
Q.7 Spend time with your Grandparents.

### Maths

Q.1 Write and learn tables from 1 to 25.

Q.2 Draw a house and tree with straight lines.

Q.3 Puzzle



Q.4 Match the followings:

(A)

$7+8$

$20+30$

$140+25$

$100+55$

(B)

$100-50$

$200-45$

$175-10$

$30-15$

Q.5 Addition:

$$\begin{array}{r} 70 \\ + 77 \\ \hline \end{array}$$

$$\begin{array}{r} 456 \\ + 987 \\ \hline \end{array}$$

$$\begin{array}{r} 509 \\ + 089 \\ \hline \end{array}$$

$$\begin{array}{r} 901 \\ + 109 \\ \hline \end{array}$$

Q.6 Subtract:

$$\begin{array}{r} 728 \\ - 698 \\ \hline \end{array}$$

$$\begin{array}{r} 409 \\ - 377 \\ \hline \end{array}$$

$$\begin{array}{r} 293 \\ - 109 \\ \hline \end{array}$$

$$\begin{array}{r} 900 \\ - 199 \\ \hline \end{array}$$

### EVS

Q.1 Draw a Country Map.

Q.2 Draw a map from your Home to School.

Q.3 Write name and draw 5 Wild animals, 5 Domestic Animals and 5 Pet Animals.

Q.4 Write 5-5 name of animals which live in water and live on land.

Q.5 Write 5 uses of water.

Q.6 Draw four important places in our neighbourhood.

Q.7 Make a model of Letterbox.


### Class III

#### हिंदी

1. पाठ आठ (8) से पाठ बारह (12) तक सभी प्रश्नों के उत्तर याद करो ।
2. निम्न प्रश्नों के उत्तर लिखो :-
  - (क) पहाड़ी गाँव गेंवली में मीरा बहन ने कौन से आश्रम की स्थापना की ?
  - (ख) गुरुजी थैली में क्या लिए जा रहे थे ?
  - (ग) पिंजड़ा बिना बाघ के कैसे बंद हो गया ?
  - (घ) सेठ ने किस रंग के कपड़े रंगने को कहा ?
3. चित्रों के माध्यम में गाँधी जी के बारे में कुछ वाक्य लिखो एवं याद करो ।
4. सर्दियों के मौसम में आपको कैसा लगता है उसपर कुछ वाक्य लिखो एवं याद करो ।
5. पाठ 8 से पाठ 12 तक प्रतिदिन किताब पढ़ें ।
6. पाठ 8 से पाठ 12 तक व्याकरण से सम्बंधित अभ्यास कार्य लिखो एवं याद करो ।

#### ENGLISH

Q.1 Write the answers:

- (a) Where was the man going?
  - (b) When does the baby laugh?
  - (c) Does the child ever get a letter?
  - (d) What is the vegetable man selling?
  - (e) Where do the trains run?
- 

Q.2 Make two words:

- I. Grand parents
- II. Nothing

Q.3 Write similar words:

- I. Foolish
- II. Stone

Q.4 Correct the spelling:

- I. Pleyful
- II. Washarman

Q.5 Write the opposite:

- I. Never
- II. Dark

Q.6 Write five sentences on 'My Pet Dog' and draw the pictures also.

Q.7 Write five sentences (Textbook P.No.62)

## Maths

### SOLVE ALL QUESTIONS TWO TIMES.

Q1-Complete the following.

- (i) 1 Kg=\_\_\_\_\_ gram.
- (ii) 1 Litre=\_\_\_\_\_ml.
- (iii) 1 Hour=\_\_\_\_\_min.
- (iv) 3,6,9,\_\_\_\_\_,\_\_\_\_\_,\_\_\_\_\_.
- (v) 5,10,15,\_\_\_\_\_,\_\_\_\_\_,\_\_\_\_\_.
- (vi) 1,3,5,7,\_\_\_\_\_,\_\_\_\_\_,\_\_\_\_\_.
- (vii) \_\_\_\_\_x\_\_\_\_\_ =54, \_\_\_\_\_x\_\_\_\_\_ =63.

Q2-Learn Table 2 to 20 and write.

Q3-Solve by factor method.

How many in 23 dozen and 63 dozen?

Q4-How much do these things cost?

- i) 5 Toys cost=\_\_\_\_\_rupee(one toy is 3 Rs).
- ii) 4 Toffee cost=\_\_\_\_\_rupee(One Toffee is 2 Rs).
- iii) 7 Face masks cost=\_\_\_\_\_rupee(One mask is 7 Rs).

Q5-Solve it.

- a) One rail coach has 8 wheels.How many wheels in all 6 coaches?
- b) How many corners would 4 triangles have?
- c) A book has 64 pages. What will be the total number of pages in 8 such books?

## EVS

Ques.1 Arrange the following letters in the correct sequence:

Sorting the letters, stamping the letters, collecting the letters,  
Pasting the letters, writing the letters, delivering the letters.

Ques.2 Do the following appropriately:

- Which of the fastest means of communication – Post Card ( ) Post Office ( ) Telephone ( )
- \_\_\_\_\_ is the national game of India.
- What does PIN stand for \_\_\_\_\_.
- \_\_\_\_\_ is called as ship of the dessert.
- Person who cannot speak is called \_\_\_\_\_.

Ques.3 Write the steps of pot making in right order.

Ques.4 List out the games under the following category Cricket, Football, Snake Ladder, Volleyball, Flying Kites, Chess, Carom, Table Tennis, Tennis, Badminton and Cards.

Indoor games	Outdoor games

Ques.5 Learn the question and answers from your Copy.

## Class IV

### हिंदी

- 'स्वतंत्रता की ओर' पाठ में ब्रिटिश सरकार द्वारा भारतियों पर किये जाने वाले जिस अन्याय का वर्णन है उसे 100 शब्दों में लिखो |
- 'पढक्कु की सूझ' कविता को कहानी के रूप में लिखो |
- नीचे लिखे वाक्यांशों के लिए एक शब्द लिखो |  
(क) बहुत अधिक बातें करने वाले -  
(ख) दूर की सोचने वाला -  
(ग) जिसका कोई शत्रु न हो -

4. निम्नलिखित मुहावरों का अर्थ लिखकर वाक्य में प्रयोग करो -

(क) चोर की दाढ़ी में तिनका

(ख) गागर में सागर भरना

(ग) घर का भेदी लंका दावे

5. पढक्कु की सूझ कविता को चार्ट पेपर पर चित्र सहित लिखो ।

### ENGLISH

1. Write 10 animals and their homes.
2. Write 10 words and their homophones.
3. Write 10 verbs and make adverbs from them.
4. Write 5-5 words ending with AIL, EE, OOK, EEL.
5. Write 10 things that you can do to help your elders or grandparents.
6. Learn full Periodic Test 2 Syllabus.

### Maths

1. Observe the number pattern and fill in the boxes:

(a) 1	4	9	<input type="text"/>	<input type="text"/>	<input type="text"/>
(b) A60		B58	C56	<input type="text"/>	<input type="text"/>
(c) 250	240	220	<input type="text"/>	<input type="text"/>	<input type="text"/>

2. Draw figures to show the fractions and write Fraction in the words.

Fraction	Figure	In Words
1/2	<input type="text"/>	<input type="text"/>
3/8	<input type="text"/>	<input type="text"/>
4/5	<input type="text"/>	<input type="text"/>
5/6	<input type="text"/>	<input type="text"/>

3. Lata wants change for Rs.1000. How many notes will she get

- (a) All Rs.100 notes \_\_\_\_\_
- (b) All Rs.50 notes \_\_\_\_\_
- (c) All Rs.20 notes \_\_\_\_\_
- (d) All Rs.20 notes \_\_\_\_\_
- (e) All Rs.5 coin \_\_\_\_\_

4. Write 5 things each you bought in

(a) Kilogram

(b) Litres

5. Prepare a table of your family member showing their height and weight

S.No.	Name	Relation/Age	Height	Weight
-------	------	--------------	--------	--------

### EVS

Ques.1 Show the given state in Indian map and colour, draw river Ganga in the map.

- A. Assam
- B. Maharashtra
- C. Gujrat
- D. Andhra Pradesh

Ques.2 Draw a plant and label all parts.

Ques.3 In what ways did Nandita find her mama's house to be different from her house in the village.

Ques.4 Write the names of the implements. Also write what these are called in your area? For what work are they used?

Ques.5 Which of the vegetables and fruits will spoil earlier and which stay for some days.

Fruits, Vegetables that spoil quickly	Fruits and Vegetables that can stay for some days
1.	1.
2.	2.
3.	3.
4.	4.
5.	5.
6.	6.
7.	7.

### Class V

#### हिंदी

1. 10 पेज सुलेख करो .
2. 'बाघ आया उस रात' कविता को याद करो और लिखो .
3. गुरु और चेला कविता की कहानी अपने शब्दों में लिखो .

#### ENGLISH

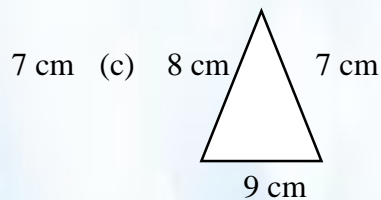
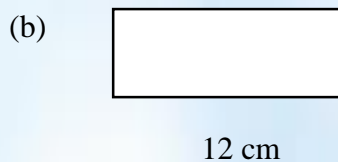
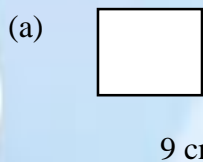
1. Do 10 pages of handwriting.



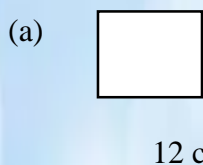
2. Learn and write the poem: - **NOBODY'S FRIEND.**  
3. Learn and write: **THE QUALITIES OF A GOOD FRIEND.**

### MATHS

Ques.1 Find the perimeter of the following figures:



Ques.2 Find area of the following:



Ques.3 Name states that shares boundary with:

- (a) Pakistan
- (b) Nepal
- (c) Bangladesh

Ques.4 Word Problems:

- (a) The Perimeter of a square is 64 cm. Find its side?
- (b) Perimeter of a triangle is 32 cm. Its one side is 10 cm and other side is 12 cm. Find third side.
- (c) A man has total Rs. 36009.28. He spent Rs. 1283.99. How much money is left with them?

Ques.5 Solve:

- (a)  $98.163 + 349.128$  (b)  $69.121 - 13.978$
- (c)  $9.8 \times 6.9$  (d)  $39.105 - 13.906$
- (e)  $13.5 \times 9.7$

Ques.6 Write number names of:

- (a) 69.125 (b) 33.612 (c) 9.892 (d) 13.112

Ques.7 Write its expanded form:

- (a) 32.056 (b) 193.928 (c) 13.006 (d) 10.928

### EVS

Q.1 Fill Up:-

- i. We \_\_\_\_\_ our hands in winters by blowing on them when they are cold.

- ii. Walls of Jasma's house are decorated with beautiful \_\_\_\_\_ and small pieces of \_\_\_\_\_
- iii. We use a \_\_\_\_\_ to listen to the sounds of a heartbeat.
- iv. Players are recognized by their ability to \_\_\_\_\_ rather than by their casts or economic status.

Q.2 Answer the following question:

- i. Name the product obtained from Petroleum?
- ii. What do you understand by 'Team Spirit'?
- iii. What do we blow on the hot potatoes?
- iv. What is Richter Scale?

Q.3 Answer the following question:

- i. Write short note of Pashmina Shawl.
- ii. Write short note on Biography of Dr. B.R. Ambedkar.

dreamstime.

